

Year 2 Homework

Spring Term: Week 5



Daily Reading

Share a book with somebody at home. It could be your school book, something online, a library book or one of your own. You can ask your grown up to read some to you too. Once finished, tell them what it was about, what you liked/disliked and if there were any new words that you learnt. Maybe you could jot them in your reading journal too. Remember to get it signed so that you can earn stickers for 20 reads at home, 50 and more! As Dr Seuss said, 'The more that you read, the more things you will know. The more that you learn, the more places you will go'. Challenge; Learn about comprehension skills on BBC Bitesize.

[Comprehension - KS1 English - BBC Bitesize](#)



Spellings

Choose three words from the year 1 or 2 spelling list. Choose a way to practise from the list of suggestions. Then write them in a sentence. Remember to use capital letters, finger spaces and full stops. Challenge: Can you think of any other words that have the same spelling pattern? Can you practise more than 3 words? Are there any new words that you have come across when reading? Could you practise spelling these?

Writing

Can you write a story or some sentences about this picture? What interesting words could you use?



Key Words

outer space

orbit

Earth

planet

astronaut

space shuttle

floating

adventure

gravity

journey

the Moon

mission



Maths

Think about what we have been learning in school this week. Then look at the statements below and discuss whether you think they are true or false. Write the answers in your homework book. Challenge; Can you write your explanations too?

True or False ?

Compare amounts of money

The greatest amount has been circled.

1.

True or False ?

Calculate with money

The difference between the purses can be shown with one coin.



2.

True or False ?

Make a pound

Both bar models show a way to make £1

£1								
10p	10p	10p	10p	10p	10p	10p	10p	20p

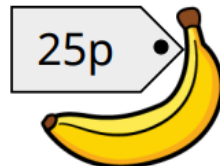
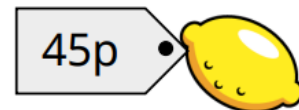
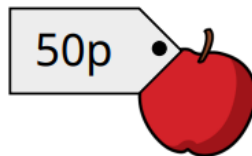
£1			
50p		20p	20p

3.

True or False ?

Find change

If I use a £2 coin to buy any two pieces of fruit, I will have more than £1 change.



4.

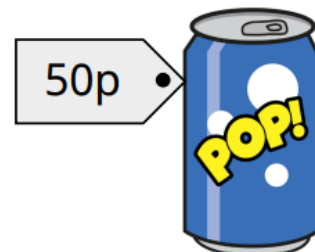
True or False ?

Two-step problems

Kim has two £1 coins, a 50p coin and a 20p coin.

She gives her sister all the silver coins.

Kim has enough money left over to buy the comic and the drink.



5.



Further optional homework

Here are some more ideas to support home learning. Please feel free to write in your homework book.

- Practise skip counting in 2's, 3's, 4's, 5's and 10's forwards and backwards from any number. Practise 2, 3, 4, 5 and 10 times tables. Can you recall these in any order?
- Choose a game to play on Nrich to develop problem solving and mathematical thinking skills. [Games - Lower Primary \(maths.org\)](https://www.maths.org/games-lower-primary)
- Go on BBC Bitesize and learn about something that interests you or research some more information about things we have been learning in class. (eg, Woodland animals, life cycles of humans and animals, the effects of exercise on our bodies, how to stay healthy and hygienic) Write about it in your homework book for you to share with your teacher. [KS1 - England - BBC Bitesize](https://www.bbc.com/bitesize)